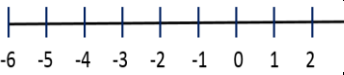





Day 1	Day 2	Day 3	Day 4												
What is the opposite of -6?	Which number has the same absolute value as 81?	What is the absolute value of -8.3?	What is the opposite of 5?												
The farther an integer is from zero, the _____ its absolute value.	What is the opposite and absolute value of -9?	Complete. The _____ of -7 and ____ is 7.	Complete. The opposite of the absolute value of -8 is _____.												
Order from Greatest to Least. -111, -1, 1, 11	Order from Greatest to Least. -78, -89, 78, 9	Order from Least to Greatest. 5, -2, 6	Order from Least to Greatest. 0, 9, -3,												
Compare 10 ○ -2	Compare -7 ○ 6	Compare -8 ○ -10	Compare -5 ○ 0												
<table border="1"> <thead> <tr> <th>Location</th> <th>Elevation</th> </tr> </thead> <tbody> <tr> <td>Lake Assal</td> <td>-512</td> </tr> <tr> <td>Bently Trench</td> <td>-8,327</td> </tr> <tr> <td>Dead Sea</td> <td>-1,349</td> </tr> <tr> <td>Lake Eyre</td> <td>-52</td> </tr> <tr> <td>Caspian Sea</td> <td>-92</td> </tr> </tbody> </table>	Location	Elevation	Lake Assal	-512	Bently Trench	-8,327	Dead Sea	-1,349	Lake Eyre	-52	Caspian Sea	-92	Use data to the left: Look at the Elevation column. Two numbers have four digits: _____ and _____.	Use data to the left: Of those two numbers, the one with the greater digit in the thousands place is _____.	Use data to the left: Which location on Earth is lower, the Caspian Sea or Lake Eyre?
Location	Elevation														
Lake Assal	-512														
Bently Trench	-8,327														
Dead Sea	-1,349														
Lake Eyre	-52														
Caspian Sea	-92														
Circle the rational #s. 5 -2 .57 9 $\frac{1}{2}$	Circle the integers. 2.5 -87 15 45 4.23	What is the opposite of -2.43?	What is the absolute value of 7.32?												
Determine if each example is positive or negative. Earned 25 dollars 20 feet below sea level 4 degrees below zero	Write the integer that best represents 23 degrees below zero.	Graph the integer 2 and its opposite on the number line.  Graph the integer 4 and its opposite on the number line. 	Graph the integer 6 and its opposite on the number line.  Graph the integer 0 and its opposite on the number line. 												






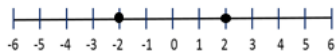
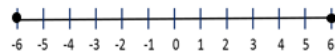
My Work

Monday

Tuesday

Wednesday

Thursday

Day 1	Day 2	Day 3	Day 4												
What is the opposite of -6 ? 6	Which number has the same absolute value as 81 ? -81	What is the absolute value of -8.3 ? 8.3	What is the opposite of 5 ? -5												
The farther an integer is from zero, the _____ its absolute value. greater	What is the opposite and absolute value of -9 ? 9 and 9	Complete. The _____ of -7 and _____ is 7 . absolute value; 7	Complete. The opposite of the absolute value of -8 is _____. -8												
Order from Greatest to Least. $-111, -1, 1, 11$ $11, 1, -1, -111$	Order from Greatest to Least. $-78, -89, 78, 9$ $78, 9, -78, -89$	Order from Least to Greatest. $5, -2, 6$ $-2, 5, 6$	Order from Least to Greatest. $0, 9, -3$ $-3, 0, 9$												
Compare 10  -2	Compare -7  6	Compare -8  -10	Compare -5  0												
<table border="1"> <thead> <tr> <th>Location</th> <th>Elevation</th> </tr> </thead> <tbody> <tr> <td>Lake Assal</td> <td>-512</td> </tr> <tr> <td>Bently Trench</td> <td>$-8,327$</td> </tr> <tr> <td>Dead Sea</td> <td>$-1,349$</td> </tr> <tr> <td>Lake Eyre</td> <td>-52</td> </tr> <tr> <td>Caspian Sea</td> <td>-92</td> </tr> </tbody> </table>	Location	Elevation	Lake Assal	-512	Bently Trench	$-8,327$	Dead Sea	$-1,349$	Lake Eyre	-52	Caspian Sea	-92	Use data to the left: Look at the Elevation column. Two numbers have four digits: -8327 and $-1,349$	Use data to the left: Of those two numbers, the one with the greater digit in the thousands place is $-1,349$ 	Use data to the left: Which location on Earth is lower, the Caspian Sea or Lake Eyre? Caspian Sea
Location	Elevation														
Lake Assal	-512														
Bently Trench	$-8,327$														
Dead Sea	$-1,349$														
Lake Eyre	-52														
Caspian Sea	-92														
Circle the whole #s. 5 -2 $.57$ 9 $\frac{1}{2}$	Circle the integers. 2.5 -87 15 45 4.23	What is the opposite of -2.43 ? 2.43	What is the absolute value of 7.32 ? 7.32												
Determine if each example is positive or negative. Earned 25 dollars + 20 feet below sea level - 4 degrees below zero -	Write the integer that best represents 23 degrees below zero. -23	Graph the integer 2 and its opposite on the number line.  Graph the integer 4 and its opposite on the number line.	Graph the integer 6 and its opposite on the number line.  Graph the integer 0 and its opposite on the number line.												

