

Fourth Grade News

May 7, 2015

Tonight, May 7-PTA Meeting/Choir Concert, 6:30 pm
Friday, May 8-Growth and Development Presentation, 2:10 pm

Tuesday, May 12-Minute to Win It Carnival Raffle Event

Thursday, May 14- Glen Oaks Art Show, 6-7 pm

Friday, May 15-Field Day, 11:45am-2:45 pm

(Shirt Colors: Dobberfuhl-blue; Hopper-tie-dye; Lee-purple;
Way-red ; Welch-green)

We will enjoy lunch from 11-11:30 on this day!

Friday, May 22- Bad Weather Make-Up Day-This IS a school day!

Monday, May 25- NO School-Memorial Day Holiday

Thursday, June 4-LAST DAY of School!

NOTE: Tutoring has officially ended as of Monday, May 11.

Students are encouraged to continue focusing on reading/math using Istation and Think Through Math. If you have any questions, please contact your child's teacher. Thanks for your support this year!

Reading Focus

Next week we will continue to review all literary elements while reading the novel, *Maniac Magee*.

Math Focus

Next week we will continue Math Quest and focus on the *Make a Table or Chart* strategy.

Writing Focus

Next week we will conduct research for our *All About Me* books.

ELM Focus

We will complete our ELM on weather.

The 4th Grade Team:

Mrs. Dobberfuhl, Ms. Hopper, Mrs. Lee,

Mrs. Way, Mrs. Welch



Homework

May 7, 2015

DUE May 14, 2015

Reading

Read 90 minutes.

Math

Complete the word problems using the strategy we've been working on this week, Draw a Picture! Remember, you will earn travel dots for your team by completing your homework!

Writing

Complete the family tree handout. If possible, include the places and dates of birth of your relatives. You will use this information in your AAM book. ***Bring this in as soon as it is complete, but no later than next Thursday.***

Science/Social Studies

No science homework.

The 4th Grade Team:

Mrs. Sandy Dobberfuhl, Ms. Sarah Hopper, Mrs. Wendy Lee,
Mrs. Allison Way, Mrs. Emily Welch

Please include place and date of birth if possible.
Return to school asap.

SCHOLASTIC

My Great-grandmother

My Great-grandmother

My Great-grandfather

My Great-grandfather

My Great-grandmother

My Great-grandmother

My Great-grandfather

My Great-grandfather

My Grandmother

My Grandmother

My Grandfather

My Grandfather

My Mother


My Father

My Brother or Sister

My Brother or Sister


My Brother or Sister

My Brother or Sister



My Family Tree

Name _____



PRACTICE

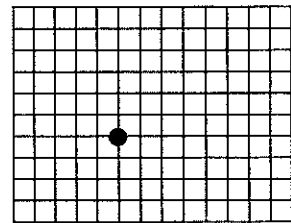


Solve. Explain your strategy.

1. Nathan makes posts for fences from pieces of wood that are 72 inches long. Each post requires 18 inches of wood. How many cuts does Nathan make in each piece of wood?

2. Abbie, Brian, Corey, and Don are standing in line. Don is behind both Brian and Abbie. Abbie is behind Corey but ahead of Brian. In what order are the four, starting with the one in front?

3. Starting from a warehouse, a delivery truck drove 15 miles north, 12 miles east, 21 miles south, 18 miles west, and 9 miles north. Where is the truck in relation to the warehouse now?



Each square = 3 miles
(Start at the dot.)

4. Marcus wants to tack 4 photographs to his bulletin board. All 4 photos are the same size. If he places a thumbtack in each corner and allows borders of photos to overlap, what is the least number of thumbtacks he will need?

MATH REASONING

Problem Solving

MR2.3

5. To measure distances, Karen used 3 pieces of string. They were 11 feet, 9 feet, and 6 feet long. How can she measure a length of 4 feet using these 3 pieces of string?

