
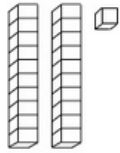
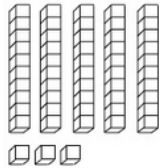


In addition to reading 20 minutes every night, please choose 2 activities from the menu below to turn in on Friday. Make sure to choose one math activity and one spelling/writing activity. **Challenge: Choose 4 activities!**

Math	Spelling & Writing										
<p>Count backwards to fill in the missing numbers.</p> <p>1. 54, _____, _____, _____, _____, 49</p> <p>2. 16, _____, _____, _____, _____, 11</p> <p>3. 77, _____, _____, _____, _____, 72</p> <p>4. 34, _____, _____, _____, _____, 29</p>	<p>Choose 3 sight words from the front of the newsletter and write a sentence using them. Underline the sight word used and remember to capitalize the first letter and use the correct punctuation mark.</p> <p>(Bonus: use more than 1 sight word in each sentence)</p> <p>Ex. <u>When</u> <u>can</u> you come over to play?</p> <p>1.</p> <p>2.</p> <p>3.</p>										
<div data-bbox="168 1243 773 1314" data-label="Section-Header">  <p>Numbers: Expanded Form</p> </div> <p data-bbox="168 1325 591 1356">Write the expanded form of the numbers below.</p> <table border="0" data-bbox="168 1377 773 1955"> <tr> <td>23 = <u>20</u> + <u>3</u></td> <td>55 = _____ + _____</td> </tr> <tr> <td>17 = _____ + _____</td> <td>89 = _____ + _____</td> </tr> <tr> <td>96 = _____ + _____</td> <td>42 = _____ + _____</td> </tr> <tr> <td>74 = _____ + _____</td> <td>68 = _____ + _____</td> </tr> <tr> <td>31 = _____ + _____</td> <td>26 = _____ + _____</td> </tr> </table>	23 = <u>20</u> + <u>3</u>	55 = _____ + _____	17 = _____ + _____	89 = _____ + _____	96 = _____ + _____	42 = _____ + _____	74 = _____ + _____	68 = _____ + _____	31 = _____ + _____	26 = _____ + _____	<p>Math Place Value practice:</p> <p>Write the number that the pictorial model represents in standard and expanded form.</p> <div data-bbox="1117 1348 1235 1499" data-label="Figure">  </div> <p>Standard form : _____</p> <p>Expanded form: _____</p> <div data-bbox="1097 1654 1255 1820" data-label="Figure">  </div> <p>Standard form : _____</p> <p>Expanded form: _____</p>
23 = <u>20</u> + <u>3</u>	55 = _____ + _____										
17 = _____ + _____	89 = _____ + _____										
96 = _____ + _____	42 = _____ + _____										
74 = _____ + _____	68 = _____ + _____										
31 = _____ + _____	26 = _____ + _____										